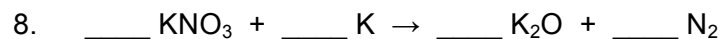
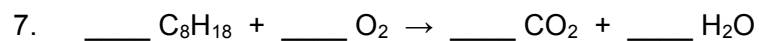
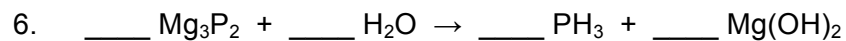

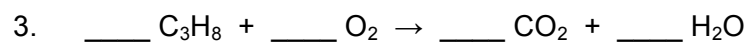
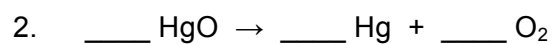



Name: _____

Date: _____ Per: _____

Chemistry
Balancing Equations WS 2

I. *Balance the following chemical equations:*





II. *Write the correct chemical formula below each compound and balance the following equations:*

